









Class 2's Home Learning Page

Welcome Class 2

Our Zoom meeting will be tomorrow at 2pm. The code will be accessible on the Home Learning page tomorrow.

Please remember to keep using the things in your packs.
Make sure you get them out each day.

Our timetable for Thursday 7th January 2021

Spelling 	Phonics 	English 	Break	Maths 	Lunch	Reading 	PE 
Read, draw or make your spellings	Phonics join in and watch	Use adjectives to describe Goldilocks		Addition by counting on		Second read. build up your reading fluency	Dance

Please let your child have a go with the tasks and let me know if your child needs support. Answers are at the bottom of the Home Learning Page.

Any concerns please message me by email on

hkentfield@handale.rac.sch.uk

I can't wait to see your child's learning, please send in photos of their work.

The children love receiving Dojo points for their work.

How many can they get this week?

Spelling:

Pick the spellings that best suits you!



Tricky	Trickier	Trickiest
to go no the into at is	here link lamp band think mask went tent so said	boil coin join oil soil joint noise point spoil avoid

Today, can you write your spellings out using a different colour for each letter or digraph.

Digraph= 2 letters that make 1 sound.

For example, **so**il

Challenge: Get your magic 10 out of your pack, pick 2 and see if you can put them into a sentence.

Phonics:



Watch and join in with the video.

Mrs Darby's Phonics group

<https://www.youtube.com/watch?v=s2rjZ4yPqQY&feature=youtu.be>

Mrs Kentfield-Howe's Phonic group

https://www.youtube.com/watch?v=6_33fOrHkFg&feature=youtu.be

English



Handwriting Practise:



Today, practise the letter 'p'. Remember it is a fall letter so it needs to go under the line. Make sure your letter are not too big. Watch the clip to show you how...

<https://teachhandwriting.co.uk/print-letters-refining.html>



The Letter 'p'

Start at the top, go down under the line and then back neatly,

Then draw a curve that joins onto your line to make a **p**!



Can you add a 'p' to these words to complete the words and phrases?

_ink _ants



_aw _rints



_iece of _izza



Punctuation and Grammar (PaG)

Today, we are going to learn about what nouns are.

Watch Jack Hartman and find out more.

<https://www.youtube.com/watch?v=9cu7C07pNbA>



So...

A noun is a naming word.

It can name a person, place or thing.



Quiz Time:

Find the noun in each sentence.

Say it out to a family member.

Can you say it in a squeaky voice? Can you say it in a troll's voice?

Solve the puzzle below by finding the correct noun.

Something you use for cutting bread.

Choose the correct noun.

knife

spoon

cat

bed



Solve the puzzle below by finding the correct noun.

An animal that barks.

Choose the correct noun.

chair

dog

Ben

light



Our English focus is to write a **Fiction** story. Can you remember what **Fiction** is?

Yes, you are right! It is a story that is made up.

Task:

Today, we are going to write about the character of Goldilocks. To do this we need to describe her so what do we use? Yes, that's right 'adjectives'

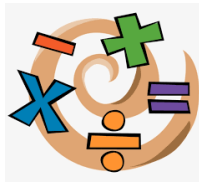
Take a look at Goldilocks.



Using adjectives write 2 sentences about what she looks like. Remember to use your spot-on sentence poster to help you.

Great job Class 2! Give yourself a break before Maths time.

Maths:



Maths Meeting

Warm up-Take out your 100 Square.

Find the number 15 and count on to 27.

Remember to say your teen numbers clearly!

1) What number comes next? 7, 8, 9, ?

2) What number comes next? 6, 5, 4, ?

3) How do spell the number 5?

4) How many pyramids?



How did you do?

Addition:

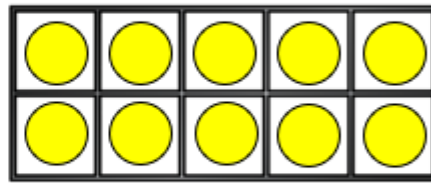

Today, let's try using the counting on method.

These skills will help you with your addition calculations.

Remember when you add you need to count 2 groups to find out how many there are altogether.

$$\square + \square = \square$$

Counting on from 10

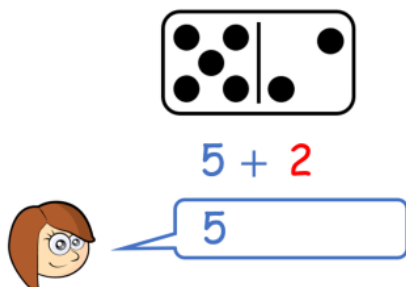


eleven, twelve, thirteen, fourteen, fifteen,
sixteen, seventeen, eighteen, nineteen, twenty

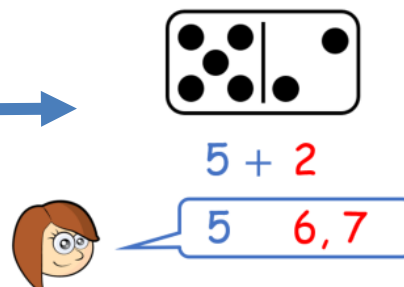
Can you point to each number word and count on from 10?

Example:

Counting on is fun!



Counting on is fun!

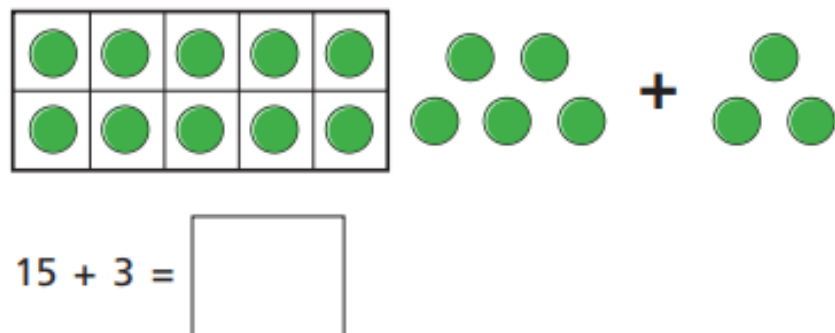
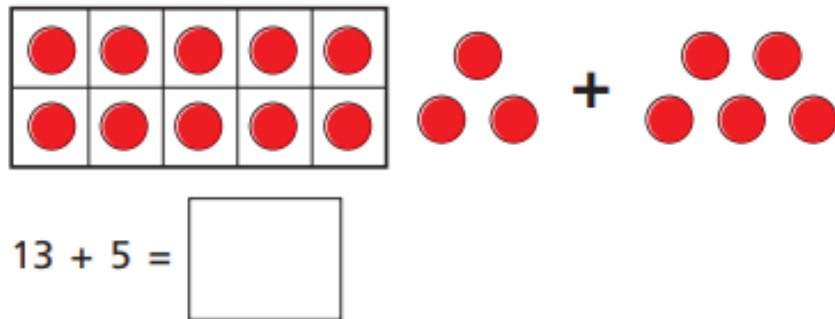
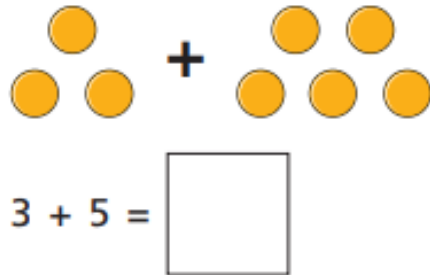


Task:

Complete the addition calculations by counting on.

Try not to start from the 1!

What number will you start from the biggest or the smallest?



Challenge:

Find the calculation that equals 16.

14 + 2	15 + 2	10 + 6	1 + 16
3 + 13	12 + 5	11 + 5	1 + 15

Reading:



Click on the [link](#) in blue to read the eBook.

*I hope you have been able to create a **free account**.

Second Read.

Re-read your book. Remember to read for sense to build up your fluency skills. Tell someone at home all about the main character. What are they like? What do they do?

Tricky	Trickier	Trickiest
https://www.oxfordowl.co.uk/api/digital_books/1415.html	https://www.oxfordowl.co.uk/api/digital_books/1410.html	https://www.oxfordowl.co.uk/api/digital_books/1345.html
		 Red Hot Winnie and Wilbur Stay at Home (oxfordowl.co.uk) 

If you cannot access the ebook read your school book.

Lexia Children can access their learning using their username and password following this link. You will need to put in my email first to grant access.

www.lexiacore5.com
hkentfield@handale.rac.sch.uk

Username and password can be found inside the front cove of your child's English Book.

PE:



Today, we would have started our dance theme so as you are all at home and need a good shake about after doing all your Home Learning today, I think you can dance along to this Just Dance Video.

Have fun! Get your parents up too!!

https://www.youtube.com/watch?v=G74_o_43_RQ



I hope you have all had a good day with your learning.

Please email me to let me know that you have tried your best today! See you all on Zoom tomorrow.




Answer Page

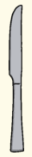



PaG- Nouns:

Solve the puzzle below by finding the correct noun.

Something you use for cutting bread.

Choose the correct noun.


knife  spoon cat bed





   

Solve the puzzle below by finding the correct noun.

An animal that barks.

Choose the correct noun.

chair dog  Ben light

Answers to the Maths:

1) What number comes next? 7, 8, 9, ? **10**

2) What number comes next? 6, 5, 4, ? **3**

3) How do spell the number 5? **five**

4) How many pyramids? **7**



Addition Task:

1. 8

2. 18

3. 18

$14 + 2$ 	$15 + 2$	$10 + 6$ 	$1 + 16$
--	----------	--	----------

$3 + 13$ 	$12 + 5$	$11 + 5$ 	$1 + 15$ 
--	----------	--	--